

Maths 1 - Mentals

Term 2, Week 7

Name: Grade:

1. $79 + 31 =$ _____

2. $29 - 1 =$ _____

3. $93 + 80 =$ _____

4. $60 \div 10 =$ _____

5. $15 \div 5 =$ _____

6. What is the number in the hundreds place in 7514?


7. Complete this counting pattern:
65, 75, 85, 95, _____, _____, _____

8. Piper has 11 apricots. Kayla has 10 strawberries. Logan has 8 oranges. How many pieces of fruit do they have altogether? _____

9. Share \$92 between 2 children. _____

10. $\$1.00 + 20 \text{ cents} =$ _____

11. Colour in a quarter of this shape:



12. Colour in a third of these stars.



13. 1 week = _____ days

14. What is the name of this 3D object?



15. Which star has the lowest chance of being selected? Black or white? _____



1. $20 + 24 =$ _____

2. $20 - 7 =$ _____

3. $37 + 69 =$ _____

4. $21 \div 3 =$ _____

5. $45 \div 5 =$ _____

6. Write 4828 in words: _____


7. Complete this counting pattern:
38, 48, 58, 68, _____, _____, _____

8. I bought 29 teddy bears and was given 10 more teddy bears. How many teddy bears do I now have? _____

9. Share \$18 between 3 children. _____

10. $\$1.00 + 10 \text{ cents} =$ _____

11. Colour in a quarter of this shape:

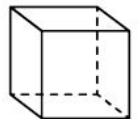


12. Colour in a quarter of these triangles.



13. How many seconds in a minute? _____

14. How many surfaces does a cube have?

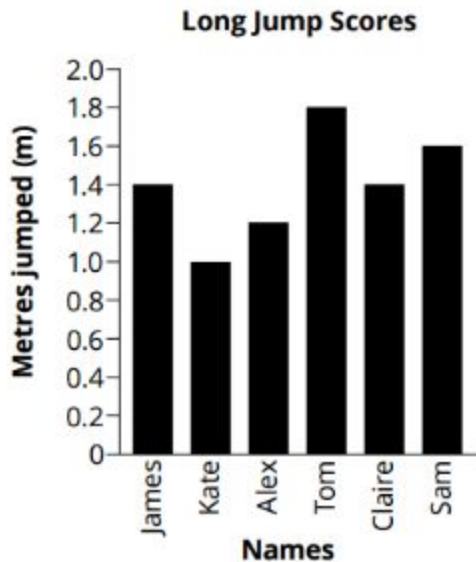


15. Which circle has the highest chance of being selected? Black or white? _____



Data Revision

1. A group of students competed in a long jump event. The graph below shows the distances jumped. Use the column graph below to answer the questions.



- a) Who jumped the furthest?

- b) Who jumped 0.6 m less than Sam? _____
- c) Which students both jumped 1.4 m? _____
- d) Who jumped 0.4 m more than Alex? _____
- e) Who had the shortest jump?

2. Here is a table of data that 4/5DDO collected from fifty Darcy Road Public School parents. Fill in the total amounts in the space provided.

Time	Amount	Total
8am	/	
8:15am	/	
8:30am	/ /	
8:45am	/ / / / /	
9am		

- a) What might the question have been that 4/5DDO asked parents?

- b) Why do you think 8:30am and 8:45am had the largest totals?

